

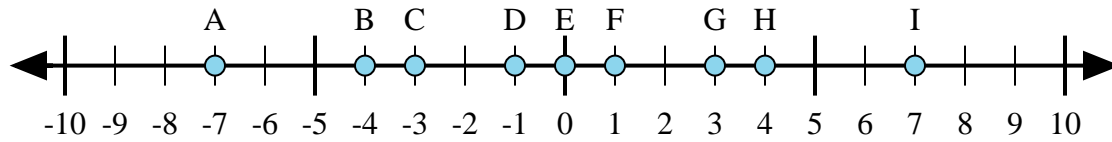
1)  $1 + (-2) =$

2)  $(-2) + (-1) =$

3)  $(-1) + 2 =$

4)  $(-2) + 1 =$

5)  $2 + 1 =$



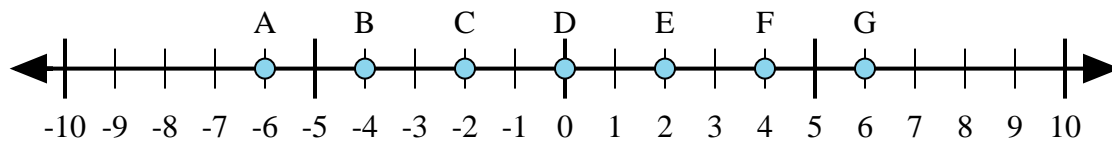
6)  $4 + (-3) =$

7)  $(-4) + (-3) =$

8)  $3 + (-4) =$

9)  $4 + 3 =$

10)  $(-4) + 3 =$



11)  $(-2) + (-4) =$

12)  $2 + (-4) =$

13)  $(-2) + 4 =$

14)  $(-4) + 2 =$

15)  $2 + 4 =$

## Answers

1. \_\_\_\_\_

2. \_\_\_\_\_

3. \_\_\_\_\_

4. \_\_\_\_\_

5. \_\_\_\_\_

6. \_\_\_\_\_

7. \_\_\_\_\_

8. \_\_\_\_\_

9. \_\_\_\_\_

10. \_\_\_\_\_

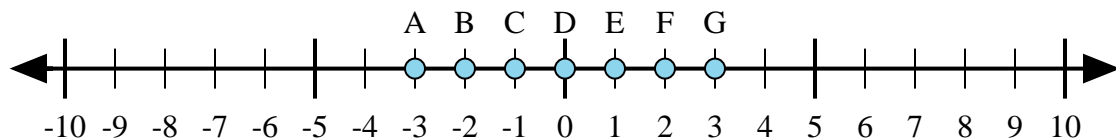
11. \_\_\_\_\_

12. \_\_\_\_\_

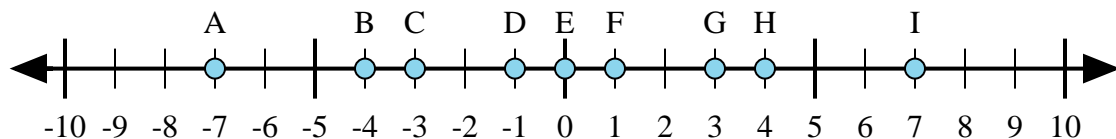
13. \_\_\_\_\_

14. \_\_\_\_\_

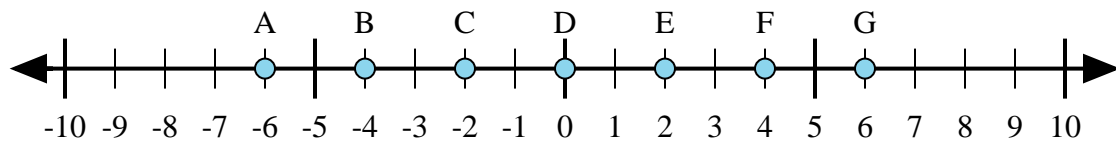
15. \_\_\_\_\_



- 1)  $1 + (-2) =$
- 2)  $(-2) + (-1) =$
- 3)  $(-1) + 2 =$
- 4)  $(-2) + 1 =$
- 5)  $2 + 1 =$



- 6)  $4 + (-3) =$
- 7)  $(-4) + (-3) =$
- 8)  $3 + (-4) =$
- 9)  $4 + 3 =$
- 10)  $(-4) + 3 =$



- 11)  $(-2) + (-4) =$
- 12)  $2 + (-4) =$
- 13)  $(-2) + 4 =$
- 14)  $(-4) + 2 =$
- 15)  $2 + 4 =$

**Answers**

1.     **C**
2.     **A**
3.     **E**
4.     **C**
5.     **G**
6.     **F**
7.     **A**
8.     **D**
9.     **I**
10.     **D**
11.     **A**
12.     **C**
13.     **E**
14.     **C**
15.     **G**